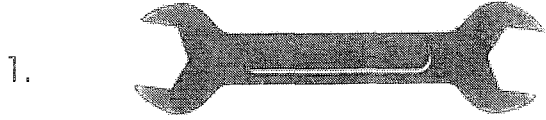




Measuring Objects


Use your ruler to measure the following objects and write the length on the line.

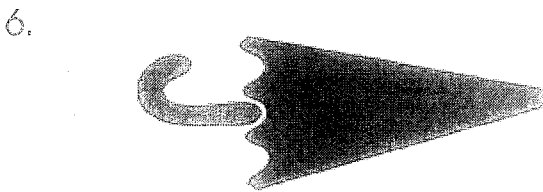


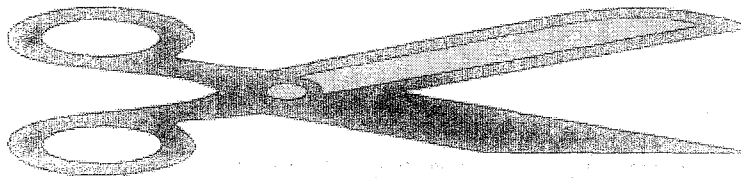















Name : _____

Score : _____

Teacher : _____

Date : _____

Measuring in Inches

How many Inches ?

















Common Measures

Length

12 inches (in.) = 1 foot (ft.)

3 feet = 1 yard (yd.)

1760 yards = 1 mile(mi.)

5280 feet = 1 mile

Liquid

2 cups (c.) = 1 pint (pt.)

2 pints = 1 quart (qt.)

4 quarts = 1 gallon (gal.)

Weight

16 ounces (oz.) = 1 pound (lb.)

2000 pounds = 1 ton

Complete the following statements.

- 1) 7 ft. = _____ in.
- 2) 24 in. = _____ ft.
- 3) 3 yd. = _____ in.
- 4) 8 qt. = _____ gal.
- 5) 6000 lb. = _____ tons
- 6) 2 gal. = _____ qt.
- 7) 36 in. = _____ ft.
- 8) 2 mi. = _____ ft.
- 9) 4 mi. = _____ yd.
- 10) 156 in. = _____ ft.
- 11) 40 ft. = _____ yd. _____ ft.
- 12) 205 ft. = _____ yd. _____ ft.
- 13) 2 ft. 6 in. = _____ in.
- 14) 2 ft. 12 in. = _____ ft.
- 15) 1 yd. 6 in. = _____ in.
- 16) 2 ft. 24 in. = _____ ft.
- 17) 4 in. 1 yd. = _____ ft. _____ in.
- 18) 10 ft. 8 in. = _____ in.
- 19) 2 c. = _____ pt.
- 20) 16 qt. = _____ gal.
- 21) 1 gal. 1 qt. = _____ pt.
- 22) 4 c. + 2 pt. = _____ qt.
- 23) 3 mi. = _____ ft.
- 24) 1 ton + 16 oz. = _____ lb.
- 25) 3520 yd. = _____ mi.
- 26) 5 tons = _____ lb.
- 27) 2 yd. + 4 ft. = _____ in.
- 28) 4 qt. = _____ pt.
- 29) 8 c. = _____ qt.
- 30) 1 ton 32 oz. = _____ lb.