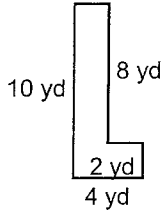


Name: _____

Date: _____

Calculate the area and perimeter of each shape.

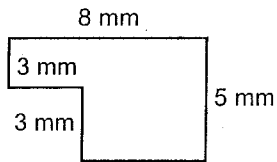
(1)



Perimeter: _____

Area: _____

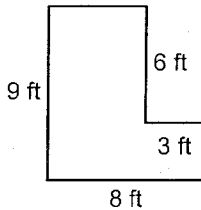
(2)



Perimeter: _____

Area: _____

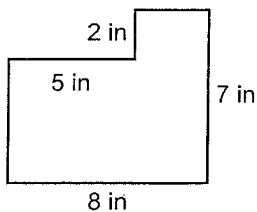
(3)



Perimeter: _____

Area: _____

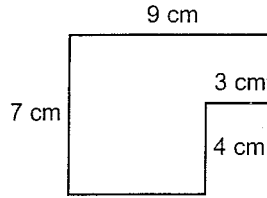
(4)



Perimeter: _____

Area: _____

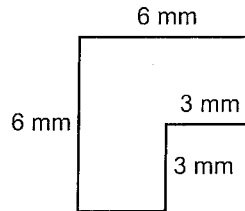
(5)



Perimeter: _____

Area: _____

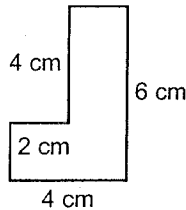
(6)



Perimeter: _____

Area: _____

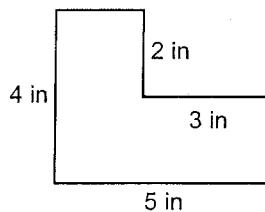
(7)



Perimeter: _____

Area: _____

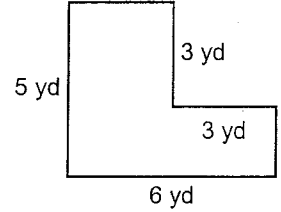
(8)



Perimeter: _____

Area: _____

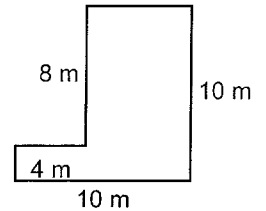
(9)



Perimeter: _____

Area: _____

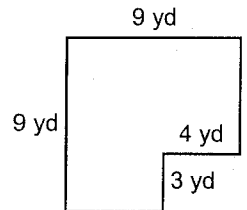
(10)



Perimeter: _____

Area: _____

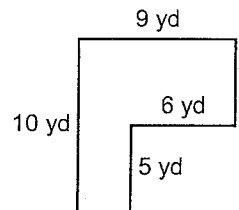
(11)



Perimeter: _____

Area: _____

(12)



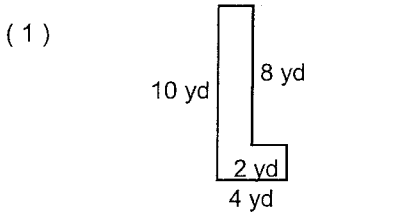
Perimeter: _____

Area: _____

Name: _____

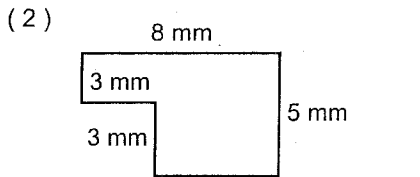
Date: _____

Calculate the area and perimeter of each shape.



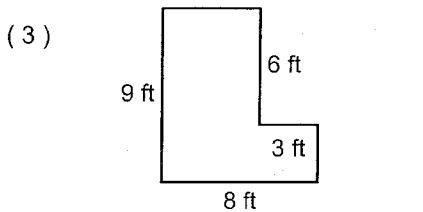
Perimeter: _____

Area: _____



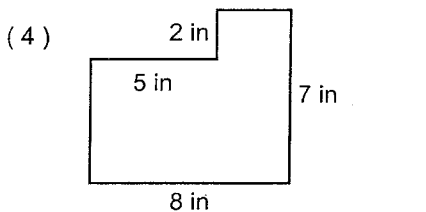
Perimeter: _____

Area: _____



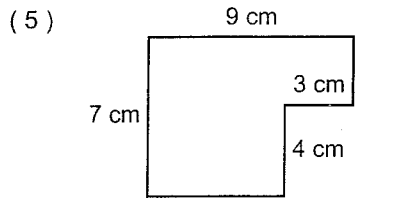
Perimeter: _____

Area: _____



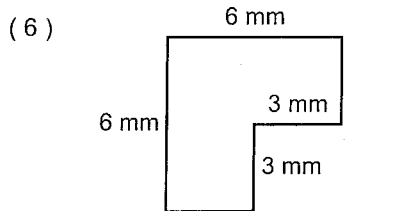
Perimeter: _____

Area: _____



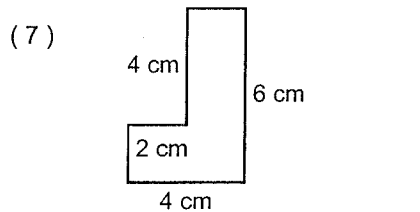
Perimeter: _____

Area: _____



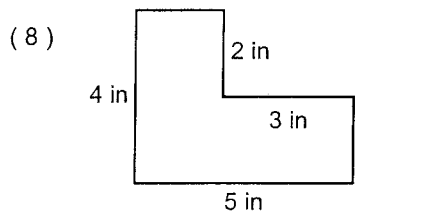
Perimeter: _____

Area: _____



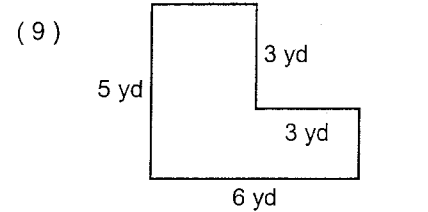
Perimeter: _____

Area: _____



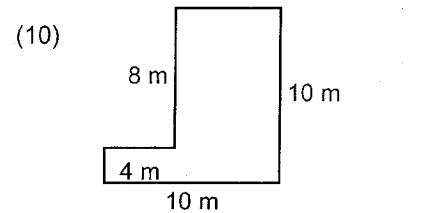
Perimeter: _____

Area: _____



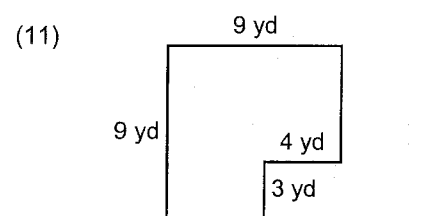
Perimeter: _____

Area: _____



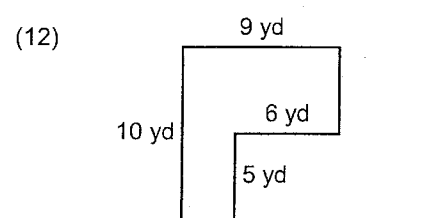
Perimeter: _____

Area: _____



Perimeter: _____

Area: _____



Perimeter: _____

Area: _____