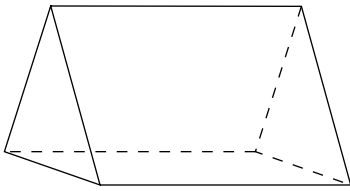


Practice 8-8

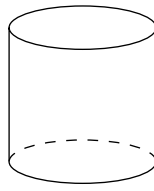
Three-Dimensional Figures

Describe the base and name the figure.

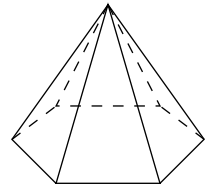
1.



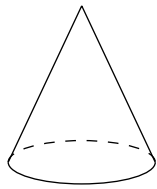
2.



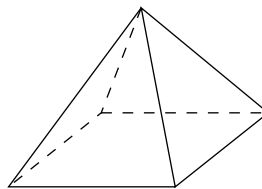
3.



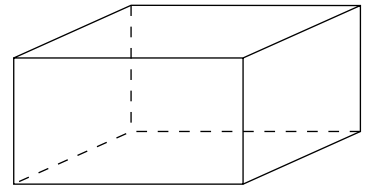
4.



5.

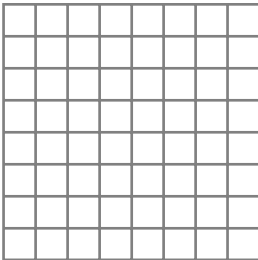


6.

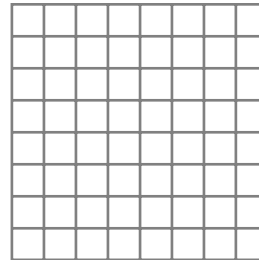


Draw each figure named.


7. a triangular pyramid



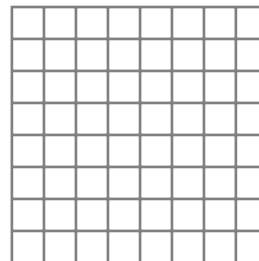
8. a square prism



9. a cone



10. a pentagonal pyramid



All rights reserved.

© Pearson Education, Inc., publishing as Pearson Prentice Hall.