

Activity Lab 8-8

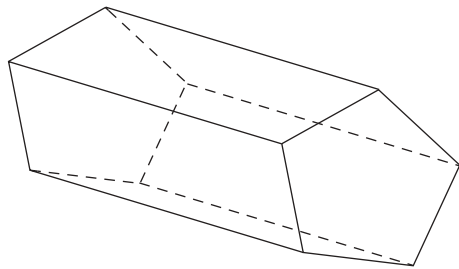
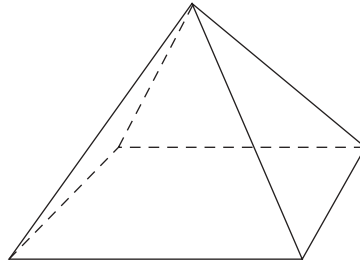
Three-Dimensional Figures

Shade the bases of the figure.

Name the figure: _____

Find the number of edges: _____

Find the number of faces: _____



Shade the bases of the figure.


Name the figure: _____

Find the number of edges: _____

Find the number of faces: _____

The locomotive below is constructed of familiar three-dimensional objects. Choose three different three-dimensional objects from the drawing. Draw each object on a separate sheet of paper, name the object, and label each of the following where applicable:

- Edges
- Vertex or Vertices
- Faces
- Base or Bases
- Height



All rights reserved.

© Pearson Education, Inc., publishing as Pearson Prentice Hall.