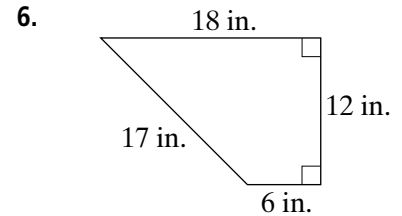
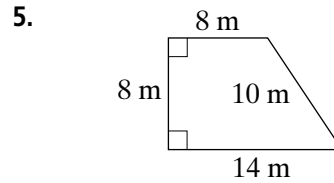
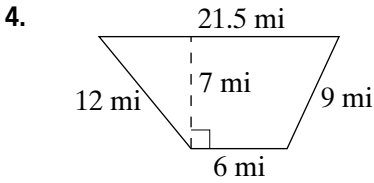
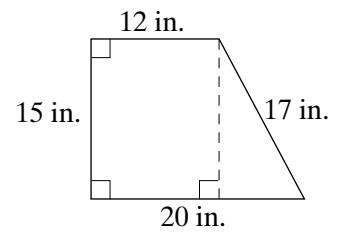
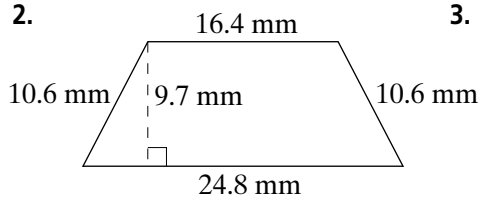
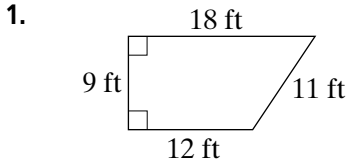


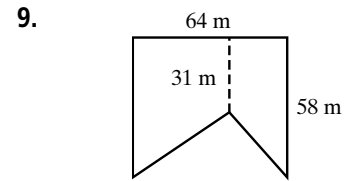
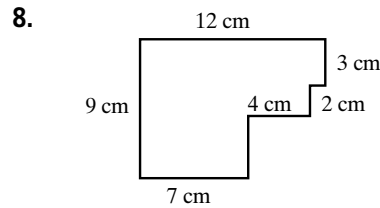
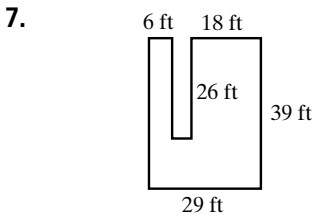
Practice 8-4

Areas of Other Figures

Find the area of each trapezoid.



Find the area of each irregular figure.



Solve.

10. The flag of Switzerland features a white cross on a red background.

a. Each of the 12 sides of the cross has a length of 15 cm.

Find the area of the white cross.

b. The flag has dimensions 60 cm by 60 cm.

Find the area of the red region.

11. A trapezoid has an area of 4 square units, and a height of 1 unit.

What are the possible whole-number lengths for the bases?

